



# Teacher's Manual

Book-3 ...02

Book-4 ...49

Book-5 ...114



# MATHS *Today*

Airan | Sharma

- Multiple Choice Questions
- Mental Maths Worksheets
- Maths Lab Activity
- Skills Test



# Maths Mind

## Part - III

### 1. Patterns

#### Picture Patterns

##### Exercise 1.1

Crates Patterns of your own :

(a) Use any 3 geometrical shapes.



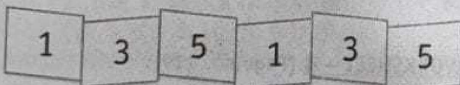
(b) Use any 3 fruits :



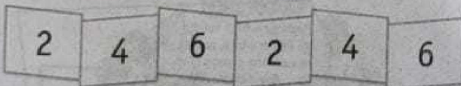
(c) Use any 3 objects seen in the sky.



(d) Use any 3 odd number.



(e) Use any 3 even number.





##### Exercise 1.2

Colour the rectangles to complete the pattern :

(a) and (b) Do yourself.

##### Exercise 1.3

Colour the two shapes in column B that form the shape in column A :



##### Exercise 1.4

Identify the same shapes and colour them alike :

